



Maheshwari Public School, Ajmer
Periodic-Test – 1; Session: 2022-23
Class: VII; Subject: Computer Science

Time Allowed: 45 min.

Maximum Marks:10

General Instructions:

- This paper consists of total five questions. All questions are compulsory to attempt.
- Marks are indicated against each question.

Q1. Application Based Questions.

(1/2x2=1)

1. Karan has created a chart. He wants to improve its appearance by changing the background colour of the Plot area. Suggest him the option he should use to do so?
2. Aarav's computer hangs frequently as it has virus in it. Suggest him the software he should install in order to solve this problem?

Q2. Read the given statements carefully and fill in the blanks.

(1/2x4=2)

1. A _____ virus is associated with the application software, like Word, Excel, and PowerPoint.
2. A _____ is a combination of two or more chart types in a single chart.
3. A _____ can be an online stranger or a person known to the targeted person.
4. A _____ feature of Excel helps you arrange the data either in an ascending or descending order.

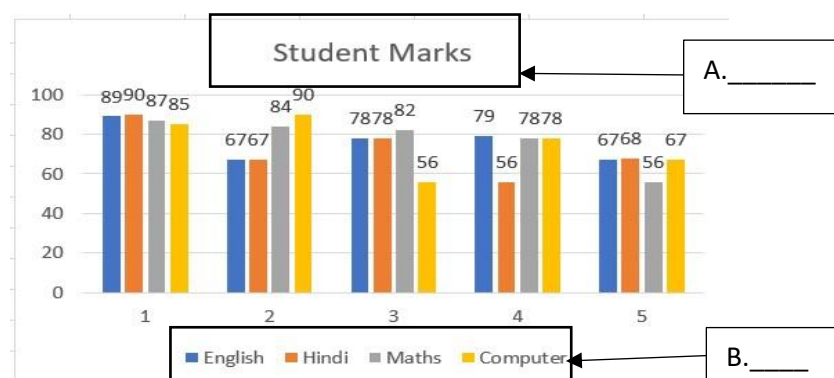
Q3. Unscramble the words given below with the help of the given clues.

(1/2x2=1)

1. When a person is identified by retinal scan, fingerprints, voice recognition, etc is known as **I B O E M T I R S C** _____.
2. This chart displays data in the form of vertical bars. **C L O N U M** _____.

Q4. Look at the picture given below and identify the elements of Chart.

(1/2x2=1)



Q5. Answer the following questions.

1. It is an illegal activity done through the Internet. Explain it with the help of example. (1)
2. There are various types of challenges and threats associated with the use of Internet. Differentiate between Cyber Stalking and Cyber Bullying. (2)
3. It is the miniature view of a chart. Explain Sparklines with its types. (2)

माहेश्वरी पब्लिक स्कूल, अजमेर
सामयिक परीक्षा-1 , सत्र-2022-23
विषय-संस्कृत कक्षा-सप्तमः

अवधि-45 मिनट

पूर्णांक-20

निर्देशाः

- ❖ एतस्मिन् प्रश्नपत्रे प्रश्नानां संख्या 9 अस्ति ।
- ❖ सर्वे प्रश्नाः करणीयाः अनिवार्याः सन्ति ।
- ❖ प्रश्नानां अंकाः समक्षे लिखिताः सन्ति ।

प्रश्न 1 मंजूषातः चित्वा रिक्तस्थानानि पूरयत— (त्रिंशत् ,कोटरे, एकत्रिंशत्, प्रतिवसति स्म)	2
(क) एकः कूर्मः अपि तत्रैव ——— ।	
(ख) तस्य वृक्षस्य——एकः सर्पः अपि अवसत् ।	
(ग) एकस्मिन् मासे——अथवा ——दिवसाः भवन्ति ।	
प्रश्न 2 केचित् द्वौ शब्दार्थं लिखत—	2
(क) दुर्बुद्धिः (ख) अपायः (ग) कृषकदम्पती	
प्रश्न 3 अधोलिखित वाक्ये कः कं प्रति कथयति ।	2
(क) प्रातः यद् उचितं तत्कर्तव्यम् । अथवा अत्र कः उपायः ?	
प्रश्न 4 केचित् द्वौ अंकानां कृते पदम् लिखत—	2
(क) 28 (ख) 40 (ग) 50	
प्रश्न 5 केचित् द्वौ समयवाचकान् अंकान् लिखत—	2
(क) 10.30 (ख) 5.00 (ग) 12.30	
प्रश्न 6 अधोलिखितं पद्यांशस्य हिन्दीभाषायां अनुवादं कुरुत— सुहृदां हितकामनां वाक्यं यो नाभिनन्दति । स कूर्म इव दुर्बुद्धिः काष्ठाद् भ्रष्टो विनश्यति ॥	3
प्रश्न 7 केचित् द्वौ प्रश्नानां उत्तराणि एकपदेन लिखत—	2
(क) कूर्मस्य किं नाम आसीत् ?	
(ख) सर्वदा कुत्र सुखम् ?	
(ग) कृष्णमूर्तेः कति कर्मकराः सन्ति ?	
प्रश्न 8 पूर्णवाक्येन उत्तरत—	2
(क) लम्बमानं कूर्मं दृष्ट्वा पौराः किम् अवदन् ? अथवा (ख) केचित् चत्वारः मासानां नामानि लिखत ।	
प्रश्न 9 चर् धातोः लंग्लकारे अथवा लोट्लकारे धातुरूपाणि लिखत ।	3

बालिका शब्द इत्यस्य आकारान्त स्त्रीलिंगे प्रथमा , तृतीया विभक्तयाम् शब्दरूपाणि लिखत ।

Time Allowed: 45 min.

Maximum Marks:20

Q1. Fill in the blanks with appropriate words:

[2X½=1]

- a) _____ is the measure of degree of hotness or coldness of a body.
b) The semi digested food that is chewed again by ruminants is called _____.

Q2. State true or false for the following statements:

[2X½=1]

- a) The normal temperature of human body is 37°C.
b) Digestion of starch starts in the stomach..

Q3. Answer the following in one word:

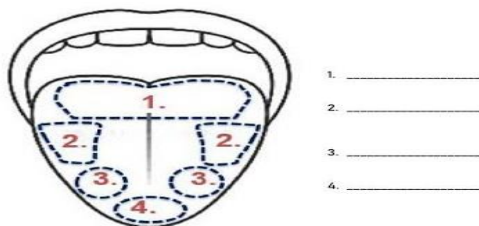
[1X3=3]

- a) Type of thermometers which do not contain mercury.
b) Materials through which heat can flow easily.
c) A white hard substance, covering our teeth..

Q4. Answer the following short answer type I questions:

[2x3=6]

- a) State any two differences between a clinical thermometer and a laboratory thermometer.
b) Give reason for the following:
(i) It is better to wear light coloured clothes in summers.
(ii) The handles of pressure cookers are covered with thick plastics.
c) The tongue is a fleshy muscular organ attached at the back, to the bottom of the mouth. The surface of the tongue is not smooth. It is quite rough due to the presence of thousands of tiny bumps, called taste buds. The taste buds help us to detect different tastes. Observe the given picture carefully and identify the different taste buds:



OR

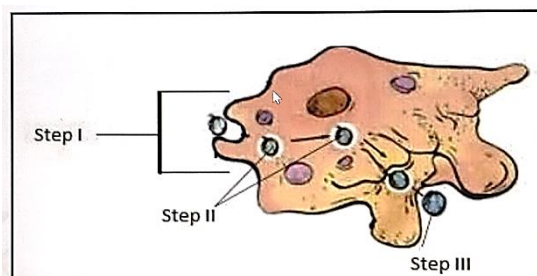
Which part of the digestive canal is involved in:

- (i) absorption of food (ii) Chewing of food
(iii) Killing of bacteria (iv) Complete digestion of food.

Q5. Answer the following short answer type II questions:

[3x3=9]

- a) The given figure shows the steps involved in the intake and digestion of food by 'Amoeba'. Identify and describe these steps.



- b) What are villi? What is their location and function?
c) At a camp site there are tents of two shades-one made with black fabric and the other with white fabric. Which one will you prefer for resting on a hot summer afternoon? Give reason for your choice. Would you prefer the same tent during winters also?

माहेश्वरी पब्लिक स्कूल, अजमेर
पूर्व मध्यावधि परीक्षा; सत्र: 2022-23
कक्षा: सातवीं; विषय: हिंदी

समयावधि-45 मिनट
सामान्य- निर्देश

पूर्णांक-20

1. प्रश्नपत्र में कुल तीन प्रश्न हैं।

2. सभी प्रश्नों के अंक उनके सामने अंकित हैं।

प्रश्न 1. निम्नलिखित प्रश्नों के उत्तर एक पंक्ति में दीजिए -

(1X6=6)

क. निम्नलिखित शब्दों के लिंग परिवर्तन कीजिए -

(अ) लेखक (ब) गुणवती

ख. निम्नलिखित शब्दों के वचन बदलिए -

(अ) माला (ब) नदी

ग. निम्नलिखित श्रुतिसमभिन्नार्थक शब्दों के अर्थ स्पष्ट कीजिए -

(अ) अनल (ब) अंक

अनिल अंग

घ. निम्नलिखित वाक्यांशों / अनेक शब्दों के लिए एक शब्द लिखिए -

(अ) रात में घूमने वाला (ब) जिसका आचरण अच्छा हो

ड. काका कालेलकर ने नदियों को किस नाम से पुकारा है ?

च. दादी माँ के उदास रहने का क्या कारण था ?

प्रश्न 2. निम्नलिखित प्रश्नों के उत्तर दो या तीन पंक्तियों में दीजिए -

(2X4=8)

क. सदैव बहुवचन वाले दो शब्द लिखकर उनका वाक्यों में प्रयोग कीजिये।

ख. कठपुतली के क्रोध का क्या कारण है ?

ग. दादी माँ रामी की चाची पर क्यों बिगड़ रही थी ?

घ. नदियों को 'हिमालय की बेटियाँ' क्यों कहा गया है ?

प्रश्न 3. निम्नलिखित प्रश्नों में से किन्हीं दो के उत्तर विस्तार पूर्वक दीजिए -

(3X2=6)

क. मैदानों में नदियों के रूप और स्वभाव में क्या परिवर्तन दिखाई देता है और क्यों ?

ख. आजादी की बात कहने के पश्चात पहली कठपुतली क्या सोचने लगी ?

ग. दादाजी के दिये कंगन दादी माँ के लिए क्या महत्व रखते थे ?

घ. 'हिमालय की बेटियाँ' पाठ के आधार पर हिमालय की विशेषताओं का वर्णन अपने शब्दों में कीजिए ?

Class: VII; Periodic Test -1;

Subject- English; Session:2022-23

Time- 45 minutes

Marks-20

General Instructions

- There are total six main questions along with its sub-parts and three questions have internal choices.
- Marks are indicated against each question.
- Adhere to the given word limit wherever required.

Q1. Read the passage carefully and answer the questions that follow. (1x5=5)

I am one of those who love the desert. It brings peace to my mind after the daily battle for one's bread. When I am tired of fighting a green countryside does not allow me to forget my worries; everywhere I can see flowers and trees, birds and beetles continuing the restless struggle before my eyes, each trying hard to win even if its own life is the death of another.

In the desert, however, the sun is the master; all else retires before its merciless rays. Only where there is water does the earth of the desert give a rich home to trees and flowers; but one has to go a long way to find water in a desert, otherwise, it would not be desert so those who love the peace of a treeless and grassless place can stand on the top of a rocky hill and see nothing around them but the sun baked desert. With no signs of effort or passion to disturb them. Then strengthened in spirit, with rested nerves and a peaceful mind. They can return to the battle for existence in the towns.

- a. The green countryside does not allow the writer to forget his worries. Why?
- b. The writer prefers the desert to green places. Justify with a reason.
- c. Describe the various ways in which those people who love the peace are different from those who went to the desert.
- d. Explain briefly the phrase 'The daily battle for one's bread'.
- e. Identify the word from the passage which means the same as 'cruel' in para 2.

Q2. Your school has recently constructed a new spacious reading room. Taking help from the hints given below write a factual description in about 80 words of a new Library-cum- Reading room..

The absence of new reading room has been constantly felt by..... It is big and spacious so as to accommodate more than 2000 books.....It is well ventilated. It has brought a marked change in reading interest..... (5)

Q3. Fill ANY TWO blanks with the correct determiners. (1/2x2=1)

an, the, much, any, some, a little

- a. A bird in the hand is worth two in _____ bush.
- b. You can take _____ of the books as long as you promise to keep it safely.
- c. There's _____ milk left in the fridge. It should be enough for our coffee.

**Q4. The following passage has not been edited. There is one error in each line.
Write ANY TWO incorrect words and the correction in your answer sheet. (1x2=2)**

	Incorrect	Correct
Paper were first made by the Egyptian	a. _____	_____
From the plant names papyrus.	b. _____	_____
Demand of paper growing with the advent of books worldwide.	c. _____	_____

Q5. Read the extract and answer the following questions. (1X3=3)

Mahendran looked up, alarmed. He had just been sharpening his claws on the edge of the coconut shell. But worse than Ravi's awful whoop EEK was a 'Kreech.....!' from the window. What a weird sound ! If Mridu was startled, M.P. Poonai was frightened out of his wits. Hair standing on end he bounced up and scurried towards a bamboo tray of red chillies over himself.

- Who is Mahendran and why was he alarmed?
- Write the reason for which he tried to hide himself.
- Find the antonym of 'astonished' from the given extract.

Q6. Answer ANY TWO questions in 30-40 words. (2x2=4)

- Describe the music teacher as seen from the window.
- Mention three things that Gopal did before he went to buy his hilsa fish.
- Is it good to have rebels? Justify your answer.

MAHESHWARI PUBLIC SCHOOL, AJMER

Periodic-Test: 1; Session:2022-23

Class: VII; Subject: Mathematics

Time allowed: 45minutes

M.M.: 20

General Instructions:

- i. This question paper consists of 11 questions. All questions are compulsory.
 - ii. Internal choice is provided in 2 marks and 3 marks question.
 - iii. Marks are indicated against each question.
-

- | | | |
|-------------|--|----------|
| Q1. | Find: $12 \div \frac{3}{4}$ | 1 |
| Q2. | Find: $\frac{1}{4}$ of $\frac{3}{7}$ | 1 |
| Q3. | Give first step you will use to separate the variable and then solve: $y + 4 = 4$ | 1 |
| Q4. | Express in kg: 4kg 8g | 1 |
| Q5. | Write the following equation for "Three fourth of t is 15". | 1 |
| Q6. | Solve the following equation: $3(n-5) = 21$ | 2 |
| Q7. | Write the following decimal in expanded form: 491.05 | 2 |
| Q8. | If you subtract 6 from 5 times a number, you get 29, find the number. | |
| | OR | 2 |
| | Laxmi's father is 49 years old. He is 4 years older than 3 times Laxmi's age. What is Laxmi's age? | |
| Q9. | Simplify and write the result in decimal form:
$(0.2 \times 0.14) + (0.5 \times 0.92)$ | 3 |
| Q10. | Michael finished colouring a picture in $\frac{7}{12}$ hour. Vaibhav finished colouring the same picture in $\frac{3}{4}$ hour. Who worked longer? | 3 |
| | OR | |
| | Express 35mm in centimetre, metre | |
| Q11. | Solve for p: $4 + 5(p - 1) = 34$ | 3 |

Maheshwari Public School, Ajmer
Periodic Test I: 2022-2023
Class: VII: Subject: Social Science

Maximum Time: 45 Minutes

Maximum Marks: 20

General Instructions:

All questions are compulsory, however internal choice is given. Altogether there are 10 questions.

A. Answer the following questions very briefly: (3×1=3)

1. Name the two major components of biotic environment.
2. There were two major cities under the control of Chahamanas. Name them.
3. State any two factors which affect our health.

B. Answer the following questions in three to five lines: (4× 2=8)

4. State any four healthcare facilities provided by the Government.
5. With the help of a flow chart explain the types of environment.

OR

With the help of a web chart describe the components of environment.

6. Give the full form of RMPs. Where are they found?
7. Name the parties involved in the tripartite struggle.

C. Answer the following questions in detail: (3×3=9)

8. To gain acceptance new dynasties adopted several strategies. Explain.

OR

Write any three qualifications which are necessary to become a member of a committee of the Sabha in the Chola Empire.

9. Give any three differences between public healthcare services and private healthcare services.

10. Give reason:

- (i) Man modifies his environment.

OR

- (ii) Plants and animals depend on each other.